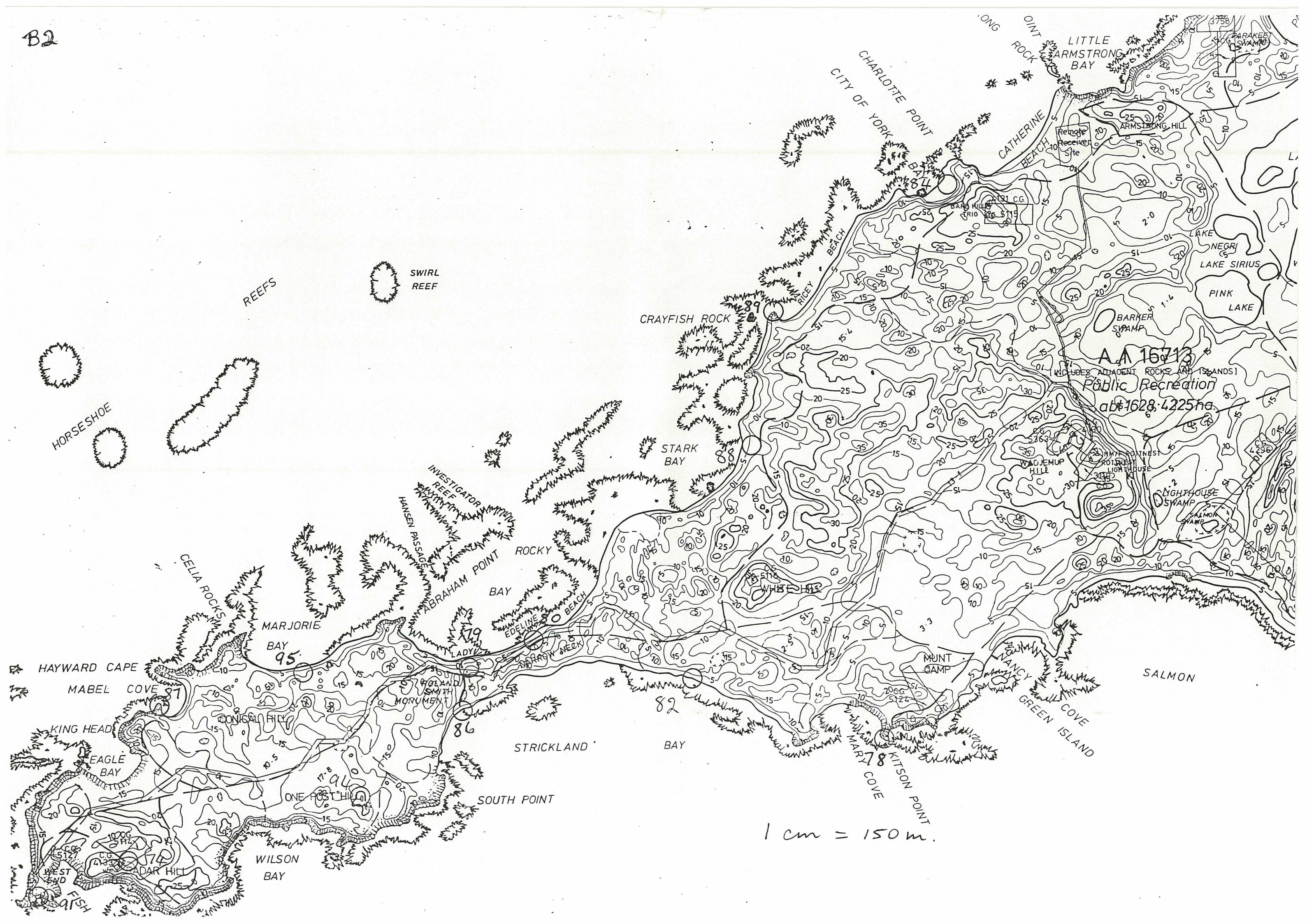


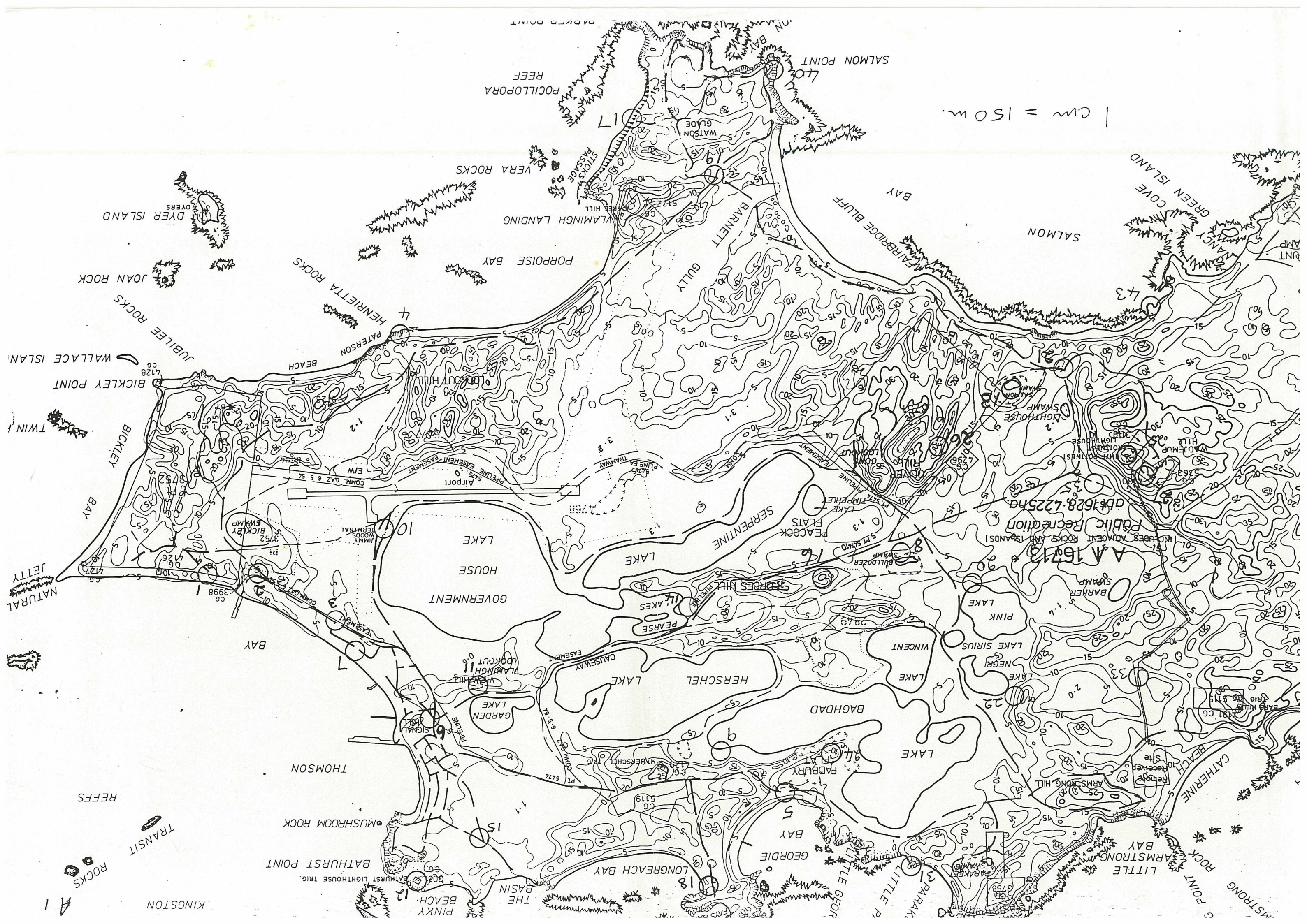


1 cm = 150 m









1 cm = 150 m.

A 1

KINGSTON

BATHURST POINT

PINKY BEACH

THE BASIN

LONGREACH BAY

GEORDIE BAY

LITTLE GEORGE BAY

LITTLE PARAKEY BAY

LITTLE ARMSTRONG BAY

ROCK POINT

ARMSTRONG

CATHERINE BEACH

ARMSTRONG HILL

PADBURY

LAGRANGE

HERSCHEL LAKE

GARDEN LAKE

THOMSON

MUSHROOM ROCK

REEFS

TRANSIT

ROCKS

NATURAL JETTY

TWIN

BICKLEY POINT

WALLACE ISLAND

JOAN ROCK

DYER ISLAND

POINT

CAMP

ARMSTRONG

GREEN ISLAND

LITTLE COVE

SALMON BAY

SALMON BAY

FAIRBRIDGE BLUFF

BARNETT GULLY

WILKINSON LANDING

VERA ROCKS

POCILLOPORA REEF

SALMON POINT

WATSON GLADE

REEF HILL

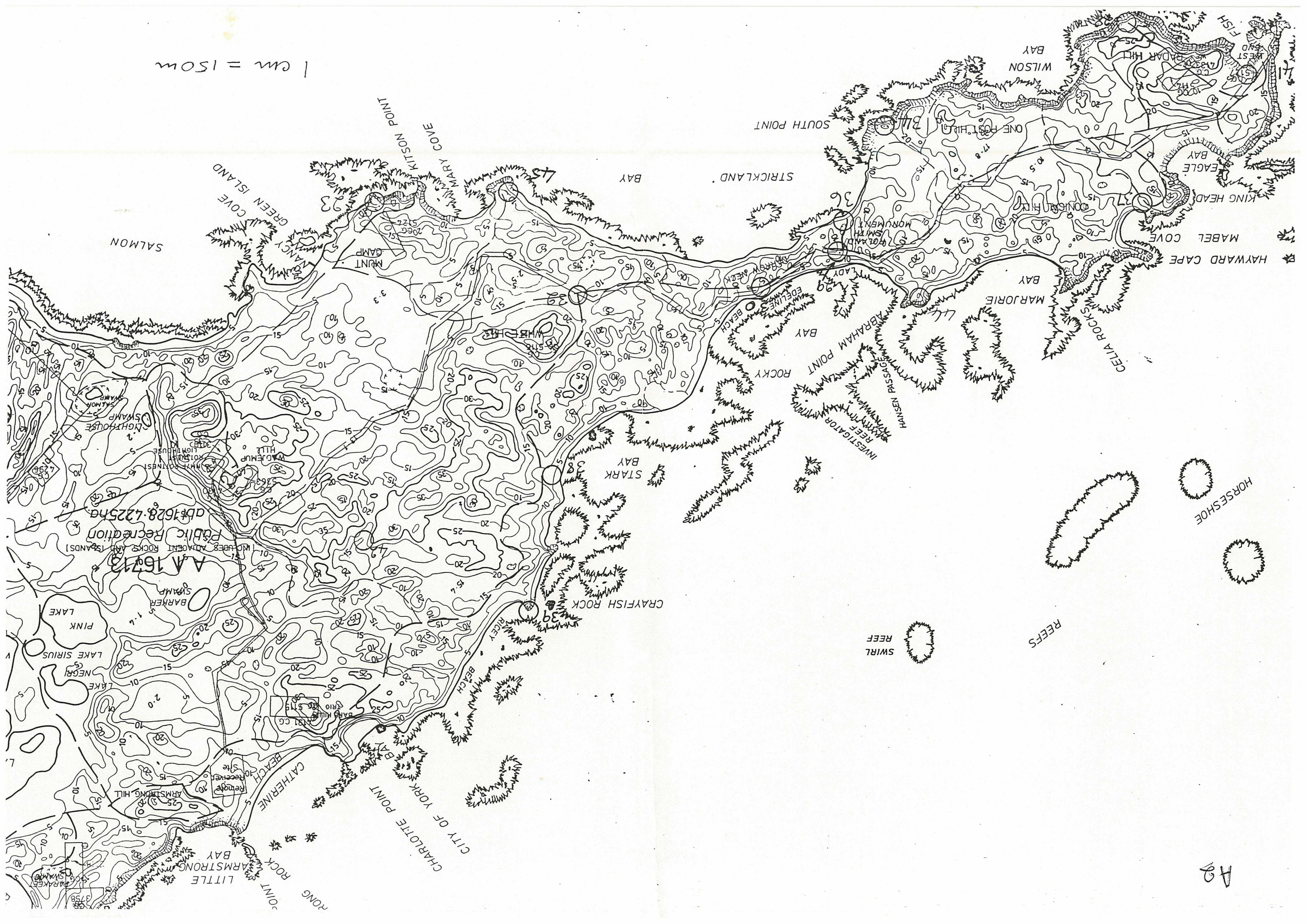
STICKS PASSAGE

VERA ROCKS

MARKED POINT



1 cm = 150m



A2



## Rottnest Bicycle Bi-Rogaine Course A

control	control question	points	answer in full			points	answer in full
01	From yellow posts how many windows has object at 295 deg. ?	20	4	02	How far to Parker Point?	20	4.1 km
03	What number way?	20	79	04	What year did the Lady Elizabeth sink?	20	1878
05	What should go one way?	20	Vehicles	06	Which cove caught the ship out?	20	Mary
07	What struts between 77 and 78?	20	Peacock	08	Who helped beautify Bulldozer Swamp?	20	Hale School
09	What is tropical at 150 deg.?	20	Palm trees	10	From a rocky mound at 108 deg. (off the ground)	20	Wind sock
11	What is asphodelus otherwise known as?	40	Onion weed	12	Which monument?	40	The Leeman monument
13	How many Norfolk Island Pines at Salmon Swamp?	40	9	14	56 deg., inside corner of wall. What do you see on the horizon?	40	Mast with 2 radio dishes
15	How many pre-cast slabs? (2' by 2')	40	56 + 12 = 68	16	On horizon at 160 deg	40	White navigation pole
17	How fast can you go?	40	5 knots	18	From navigation aid what is on horizon at 138 deg.?	40	Radio mast - 2 dishes
19	What should you take?	40	Care	20	How many pines in the western clump?	40	12
21	How far to Strickland Bay?	60	2.1 Km	22	What supports the western corner post?	60	Two wooden planks
23	What is Blinky Bill's number?	60	XX (20)	24	From the mound what is banded, at 280 deg?	60	Radio Mast
25	Who laid the first stone?	60	Inspector of Public Works,	26	What year follows E. O. C. ?	60	1902
27	From 18 metres north of tower what is red at 300 deg.?	60	Brick structure	28	How many uprights has the railing?	60	10
29	Who erected the Roly Smith monument?	60	His friends	30	Who chartered the Mira Flores?	60	Local merchants
31	When did RH call?	80	1980	32	How many bins?	80	1
33	Number engraved on side of one metre high pipe?	80	15/76 61691422	34	Sturdy man-made at 25 deg., from knoll?	80	Roland Smith monument
35	Battered reafforestation when?	80	1971	36	What is in the centre of the car park?	80	Shrubs
37	What else is on the Mabel Cove sign?	80	57	38	What does the larger sign at Stark Bay say?	80	Rubbish here please
39	What sits on the horizon, at 240 deg?	80	Small building	40	What sits on the tiny island?	80	Osprey nest
41	What are the colours of the tank valve?	100	Green/red	42	Serial no. of electricity meter	100	76N007310
43	Man-made, at 20 deg.	100	Marker post	44	From the knoll at 250 deg. what is the no. of the wreck	100	34261
45	Which club?	100	Offshore Boardriders				



## Rottnest Bicycle Bi-Rogaine

### Course B

control	control question	points	answer in full	control	control question	points	answer in full
51	What is closed?	20	Ski area	52	What should you not do behind Flat 51?	20	Smoke
53	Transformer identification. (Stone the crows!)	20	AE 100/22/0045	54	How many gates?	20	3
55	Scientific name for Rottnest Pine?	20	Callitris preissii	56	What is suspended at viewing point?	20	Rubbish bin
57	Bus stop no.?	20	1	58	Who looked out?	20	Jeannie
59	37 deg. from point what do you see on the horizon?	20	Green tank	60	Who opened the lookout?	20	W. H. Kitson
61	From green steps, what is red, white and blue at 145 deg.?	40	Kleenheat gas tank.	62	How many bikes can stand at Little Salmon Bay?	40	20 (2x10)
63	Letter in telephone cabinet no.?	40	M	64	Who did the Bicentennial planting?	40	J.S.H.A.A.
65	How many bolts hold the vanished message?	40	2	66	Tank volume?	40	9000 litres
67	What forms a triangle?	40	3 bins	68	How many poles in Salmon Swamp?	40	1
69	Triangle description	40	TBM 19	70	From the westernmost pine what object bears 34 deg.?	40	Post
71	What is in the middle of the bay?	60	Rocks	72	Tail No.?	60	8
73	How many pine logs?	60	7	74	How many steel covered openings has the lower building?	60	5
75	How many terracotta ventilators on North-east wall?	60	6	76	What is the flat top at 78 deg.?	60	Army lookout building
77	How many cups on the windspeed indicator?	60	3	78	What is the concrete pillar for?	60	Anitra plaque
79	From Roly Smith monument seat what natural feature is at 20 deg	60	Rock	80	What word is painted on the brick wall?	60	Rubbish
81	How many pickets are stayed to the southwest post?	80	2 (star)	82	Approximately how wide is the strip of rock at water's edge?	80	4.5 metres
83	What faces down at 340 deg.?	80	Navigation marker	84	What are the colours of the plastic pipes?	80	Grey, pink and white
85	What do the two yellow posts lead you to?	80	Concrete PMG junction box	86	What holds the log steps together?	80	2 chains
87	100 m at 275 deg, what is square object with hole in corner made of	80	Limestone/rock	88	From larger sign, what do you see at 195 deg. atop the knoll?	80	A post
89	What is man-made, at 120 deg.?	80	Top of lighthouse	90	How far to settlement?	80	4.2 km
91	What is Frankenia pauciflora commonly called?	100	Common Sea Heath	92	What is 15 metres long and lies east west?	100	Channel in rock
93	How many insulators on power pole 40 m from corner post?	100	8	94	What else is on the top of One Post Hill?	100	Survey mark
95	How many pieces of shade cloth?	100	20				